

Name:- _____

Queen's Valley School

Date:28.12.18

Class:- _____

Math – I;Class – II

M.M.:- 25

Roll No:- _____

Term - III(2018-19)

Time :-1hour

(Answer key)

Instructions:-

All the questions are compulsory.

Attempt the paper in neat handwriting.

Q1. Arrange the following numbers in descending order.

(2x3=6)

a) 785 , 349 , 146 , 889 889 , 785 , 349 , 146

b) 140 , 280 , 640 , 840 840 , 640 , 280 , 140

c) 621 , 612 , 731 , 713 731 , 713 , 621 , 612

Q2. Identify the shapes given below and fill in the blanks.

(2.5x2=5)



Shape cuboid

cylinder

Faces 6

3

Vertices 8

0

Edges 12

2

Q3. Give two examples of the shapes given below.

(2x2=4)

a) Sphere ball

globe

b) Cone ice-cream cone







birthday cap







(any appropriate example)

Q4. Observe the patterns given below and complete the series.

(1x4=4)

a) 530 , 540 , 550 , 560 , 570 , 580

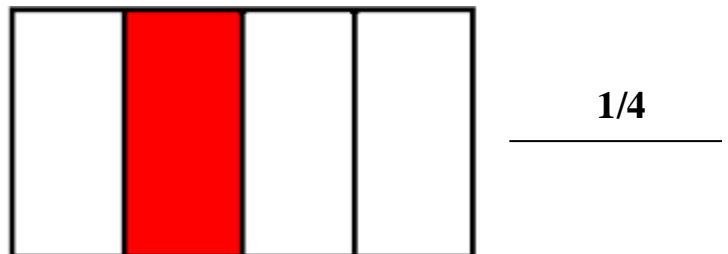
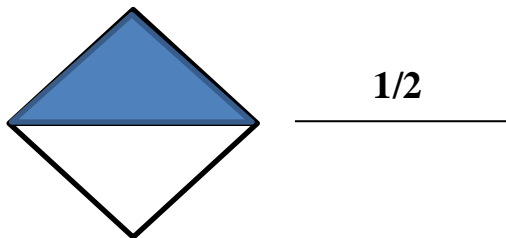
b)  ,  ,  ,  ,  , 

c)  ,  ,  ,  ,  , 

d)  ,  ,  ,  ,  , 

Q5. Write the fraction of the shaded portion.

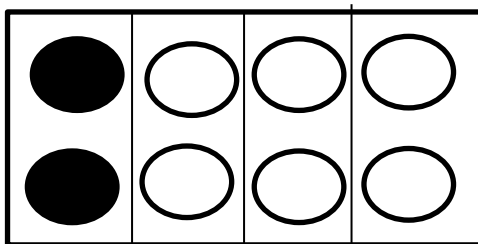
(1x2=2)



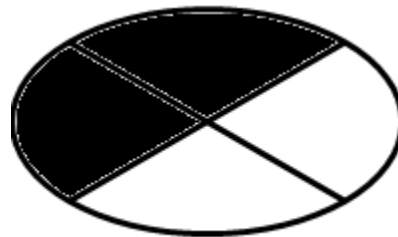
Q6. Shade the given figures according to the fractions given below.

(1x2=2)

a) 1/4



b) 1/2



Q7. Mental Math

(1/2x4=2)

a) Five less than fifty is 45 .

b) 14 X 1 = 14

c) 90 + 5 = 95

d) 24 ÷ 4 = 6